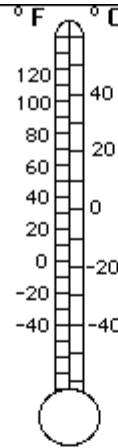
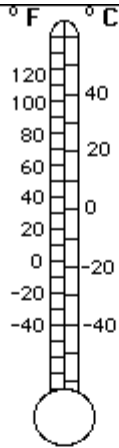
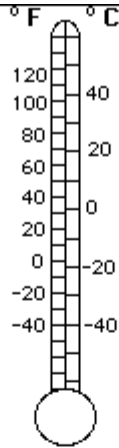
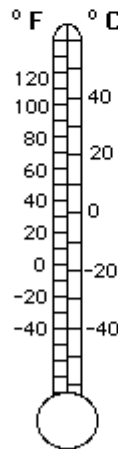
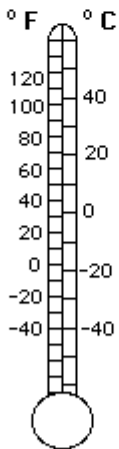
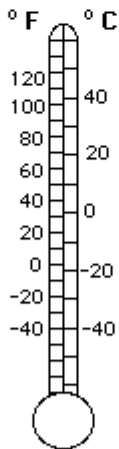


Compare Thermometers

NAME: _____



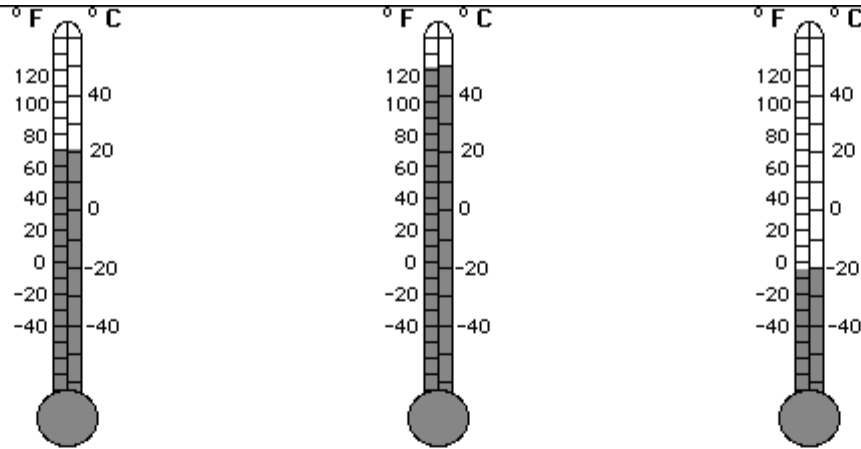
1. Color the thermometer on the left to show 70°F. This is about _____ °C.
2. Color the thermometer in the middle to show 50°C. This is about _____ °F.
3. Color the thermometer on the right to show -20°C. This is about _____ °F.
4. Which thermometer shows the lowest temperature (left, middle or right)? _____
5. Which thermometer shows the most comfortable temperature (left, middle or right)? _____



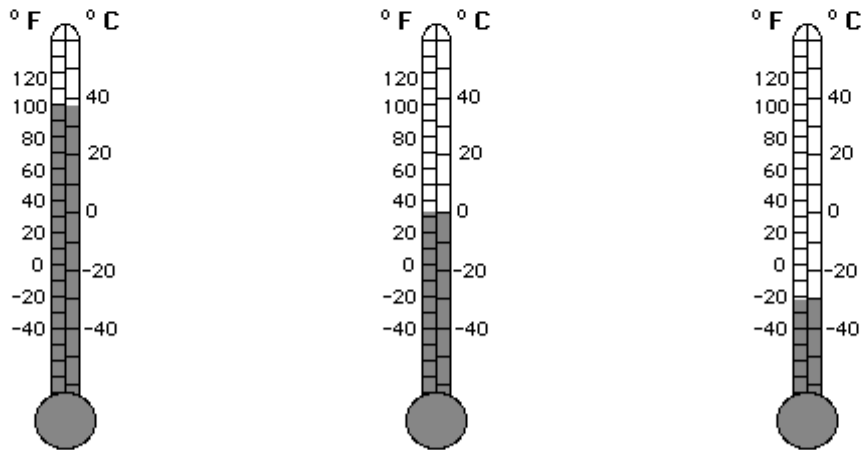
6. Color the thermometer on the left to show 100°F. This is about _____ °C.
7. Color the thermometer in the middle to show 0°C (water's freezing point). This is about _____ °F.
8. Color the thermometer on the right to show -30°C. This is about _____ °F.
9. Which thermometer shows the highest temperature (left, middle or right)? _____
10. At what temperature are Fahrenheit and Celsius thermometer readings are the same? _____

©EnchantedLearning.com

Compare Thermometers Worksheet Answers



1. Color the thermometer on the left to show 70°F. This is about 20 °C.
2. Color the thermometer in the middle to show 50°C. This is about 120 °F.
3. Color the thermometer on the right to show -20°C. This is about -5 °F.
4. Which thermometer shows the lowest temperature (left, middle or right)? right
5. Which thermometer shows the most comfortable temperature (left, middle or right)? left



6. Color the thermometer on the left to show 100°F. This is about 38 °C.
7. Color the thermometer in the middle to show 0°C (water's freezing point). This is about 32 °F.
8. Color the thermometer on the right to show -30°C. This is about -21 °F.
9. Which thermometer shows the highest temperature (left, middle or right)? left
10. At what temperature are Fahrenheit and Celsius thermometer readings are the same? -40